

Name \_\_\_\_\_

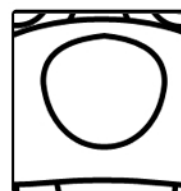
Help Baxter group these rocks for Sam by Shape.  
Draw the rocks grouped together by shape in the box.



Which Should Baxter use to group by shape?  
Circle the correct answer.



eye

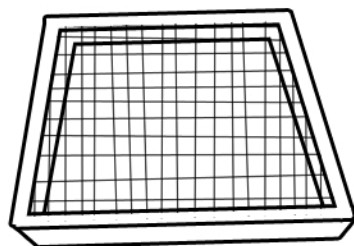


nose

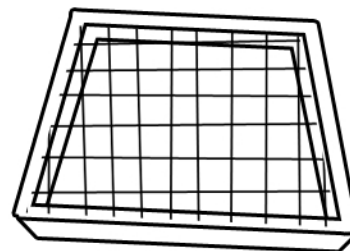
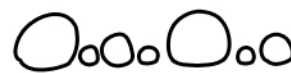


ear

Now help Baxter sort the rocks.  
Draw the rocks that will fall through the screens below.



\_\_\_\_\_



\_\_\_\_\_



Circle the screen that sorted the smallest rocks.